

المدرسة الهندية
الجديدة
أم القيوين



THE NEW
INDIAN SCHOOL
Umm Al Quwain

THE NEW INDIAN SCHOOL

UMM AL QUWAIN

**NIS CYBER OLYMPIAD
QUESTION BANK**

Organized by: I.T. Department

For

GRADE:5

National Cyber Olympiad

Note: The syllabus of NCO is based on Windows 7 and MS Office 2010. The test paper is divided into three sections.

Sample Questions





LOGICAL REASONING





1. How many times exactly two X's occurs together?

X Y X X Y X Y Y X Y X Y Y X X Y X Y X X






- (a) 5 (b) 4
(c) 2 (d) 3
2. If 'GREEN' is coded as '35664' and 'PARROT' is coded as '715592', then how will 'REPEAT' be coded?
(a) 569612 (b) 567612
(c) 597613 (d) 567611
3. Among a group of six boys. Tarun is taller than Samay but not as tall as Rohit Aakash is the tallest. Arun is shorter than Rohit but taller than Rehan. Rehan is taller than Tarun. If the boys are arranged in ascending order of heights, who is the third tallest.
(a) Arun (b) Rehan
(c) Rohit (d) Samay

COMPUTERS AND INFORMATION TECHNOLOGY

4. Which of the following is NOT a Windows 7 Aero feature?
(a) Snap (b) Peek
(c) Bump (d) Shake
5. Which of the following statements is NOT true in case of networking?
(a) Networking reduces the cost of setting up an office with computers, printers, internet and scanners.
(b) Networking allows you to share various resources like printers, internet, etc. among different computers.
(c) Networking allows you to share a single computer among various users.
(d) Networking allows you to share information among all computers connected to the network.
6. You are about to finish creating a presentation on Indian States in MS-PowerPoint 2010. The last slide of the presentation is a 'thank you' slide with some graphics which you had used in a presentation you created about New Delhi.
Which of the following would help you to insert the last slide from the presentation on New Delhi in the new presentation?
(a)  (b)  (c)  (d) 
7. You have bought a DVD of the most recent Harry Potter movie. You want to play it on your computer. Which of the following items are sufficient for you to watch the movie on your computer?
(i) DVD Drive, Speakers, Monitor
(ii) Media Player (iii) Web camera
(iv) Microphone (v) Projector
(a) (i) and (v) (b) (i) and (ii)
(c) (i), (ii) and (v) (d) All of these
8. Which one of the following video file formats is NOT supported by YouTube?
(a) .mpeg4 (b) .jpg
(c) .avi (d) .wmv
9. Which of the following devices emits computer audio as audible audio?
(a) Trackball (b) Cursor
(c) Webcam (d) Speaker
10. Which of the following is used to display images on computer's monitor?
(a) Sound card (b) Graphics card
(c) Modem (d) Ports
11. Which of the following gets your computer started once you turn it on?
(a) Hard disk (b) RAM
(c) BIOS (d) None of these
12. Aditi went to Delhi Airport as she wanted to travel to London. At the Airport security checking, her face was scanned and compared with her picture on passport to certify that she is the right person. The type of devices used at Airport are known as _____.
(a) Biometric devices (b) Touchscreen
(c) Kiosks (d) Projectors
13. A computer network to share information within an organization is known as _____.
(a) Internet (b) Intranet
(c) Extranet (d) None of these

14. Sanvi wants to open her e-mail account. She can open her account on any of the following except _____.
- (a) gmail.com (b) rediffmail.com
(c) yahoo.com (d) amazon.com
15. Rashi wants to make changes to several slides at one time and reorder them in MS-PowerPoint. Which view would be best to use?
- (a) Normal (b) Slide Sorter
(c) Reading (d) Slide Show
16. Which of the following is NOT an advantage of multimedia?
- (a) It is interactive.
(b) It has high storage and transfer overhead.
(c) It gives real world experience.
(d) Makes learning easier.
17. Which of the following is NOT a gaming console?
- (a) Wii (b) PlayStation
(c) Xbox (d) Google Play
18. Clipart is found _____ group of _____ tab in MS-Word.
- (a) Insert, Illustrations (b) Illustrations, Insert
(c) Picture, Home (d) Symbols, Insert
19. Which of the following is a toner based printer?
- (a) Dot-matrix (b) Daisy wheel
(c) Inkjet (d) Laser
20. An equalizer allows you to control the _____ of the songs you're playing.
- (a) Audio volumes (b) Audio frequencies
(c) Audio extensions (d) Audio noise
21. Which of the following is NOT a system software?
- (a)  ubuntu (b)  Windows Phone
(c)  Bitdefender (d) 
22. A drum printer is an example of _____ printer.
- (a) Page (b) Line
(c) Inkless (d) Non-impact
23. Which of the following Drop Cap positions is used in the given snapshot of MS-Word document?
- A**mara clicked paused on the video and ran to the craft drawer in the kitchen. She opened it slowly and picked up some items from it.
- (a) None (b) Dropped
(c) In margin (d) None of these
24. The _____ in left pane displays only the text content of a slide in MS-PowerPoint.
- (a) Slides Tab (b) Outline Tab
(c) Notes Pane (d) Review Pane
25. The small picture representing a program in Windows 7 is called _____.
- (a) Icon (b) Pictures
(c) Images (d) Drive

ACHIEVERS SECTION





26. Select the INCORRECT match of the operation groups to the tabs they are found in MS-Word.
- (a) Proofing – Review (b) Editing – Home
(c) Themes – Page Layout (d) Zoom – Mailings
27. Match the following MS-Word shortcut keys with the operations they performs:
- | Column-I | Column-II |
|--|---|
| (i)  | (a) Select one character to the right |
| (ii)  | (b) Select to the end of the document |
| (iii)  | (c) Select to the end of the current line |
| (iv)  | (d) Select to the beginning of the line |
| (v)  | (e) Select to the beginning of the document |
- (a) (i)-(e), (ii)-(c), (iii)-(d), (iv)-(b), (v)-(a)
(b) (i)-(d), (ii)-(e), (iii)-(c), (iv)-(b), (v)-(a)
(c) (i)-(e), (ii)-(b), (iii)-(d), (iv)-(c), (v)-(a)
(d) (i)-(d), (ii)-(a), (iii)-(b), (iv)-(c), (v)-(e)
28. When you are performing a cash transfer on a website, which of the following protocols will ensure that the transaction is safe?
- (a) SMTP (b) HTTP
(c) FTP (d) HTTPS

Answers

- | | | | | | | | | | |
|------|------|------|-------|-------|-------|-------|-------|-------|-------|
| 1. d | 4. c | 7. b | 10. b | 13. b | 16. b | 19. d | 22. b | 25. a | 28. b |
| 2. b | 5. c | 8. b | 11. c | 14. d | 17. d | 20. a | 23. c | 26. d | |
| 3. d | 6. d | 9. d | 12. a | 15. b | 18. a | 21. d | 24. b | 27. a | |

National Cyber Olympiad

Sample Questions


- Which symbol is used for processing in a flowchart?
(a)  (b) 
(c)  (d) 
- 1024 bytes are equivalent to
(a) 1 KB (b) 1 MB
(c) 1 GB (d) 1 Character
- Which of the following is a volatile memory?
(a) ROM (b) RAM
(c) Secondary memory (d) None of these
- Which feature in Word helps you create special text effects?
(a) ClipArt (b) WordArt
(c) TextArt (d) ArtText
- Which of the following is a popular spreadsheet program?
(a) Microsoft Word (b) Microsoft PowerPoint
(c) Microsoft Excel (d) Notepad
- Which of the following is an example of a secondary storage device?
(a) Floppy disk (b) Hard disk
(c) Pen drive (d) All of these
- Which of the following is the largest unit for measuring computer memory?
(a) 1 GB (b) 1 TB
(c) 1 KB (d) 1 MB
- Which indent marker is present on the left side of the ruler?
(a) Left (b) First line
(c) Hanging (d) Right
- Which of the following is not a graphical web browser?
(a) Google Chrome (b) Internet Explorer
(c) Mozilla Firefox (d) Lynx

10. Which of the following is not required to get connected to the Internet?
 - (a) Modem
 - (b) Internet Service Provider
 - (c) Printer
 - (d) Internet Access Software
11. Which of the following is a way of sending mails through the Internet?
 - (a) E-mail
 - (b) Chatting
 - (c) Videoconferencing
 - (d) All of these
12. Which of the following is not a chatting software?
 - (a) Rediff Bol
 - (b) Yahoo messenger
 - (c) MSN messenger
 - (d) Gmail
13. Which of the following is not a disadvantage of using the Internet?
 - (a) Information is insecure
 - (b) Watching movies
 - (c) Inappropriate material
 - (d) Junk mail
14. Which of the following commands is used to erase all the saved procedures in LOGO?
 - (a) ERALL
 - (b) ERASE
 - (c) DELETE
 - (d) DELALL
15. Which of the following is not a valid vertical text alignment in Word?
 - (a) Justified
 - (b) Top
 - (c) Bottom
 - (d) Middle
16. Which group in Word contains the Text Direction button?
 - (a) Alignment
 - (b) Table
 - (c) Tools
 - (d) Edit
17. Which of the following is not the valid line spacing option in Word?
 - (a) Single
 - (b) Double
 - (c) Exactly
 - (d) Triple
18. Which of the following is the part of Normal view in PowerPoint?
 - (a) Slides pane
 - (b) Notes pane
 - (c) Comments pane
 - (d) All of these
19. How much memory space is required to store the word 'text'?
 - (a) 4 bytes
 - (b) 32 bits
 - (c) 4 KB
 - (d) Both (a) and (b)

20. Which of the following instructions does not form a part of a program to perform a particular task?
- (a) Read input (b) Process data
(c) Testing the data (d) Write output
21. Which of the following effects can be applied to the background of a slide?
- (a) Picture (b) Pattern
(c) Gradient (d) All of these
22. Which of the following is the opening page of a website?
- (a) Web page (b) First page
(c) Home page (d) Opening page
23. Which of the following is the correct value for the line spacing?
- (a) 0.8 (b) 8 pt
(c) 3 (d) All of these
24. In LOGO, a variable name begins with a
- (a) Colon (:)
(b) Semicolon (;)
(c) Hyphen (-)
(d) None of these
25. Which of the following is not a correct guideline to be followed while preparing a flowchart?
- (a) A flowchart should be neat, clear, and easy to follow.
(b) There should only be one start box and one stop box.
(c) One or more flow lines can be used with the start box.
(d) Only one flow line should come out from a process box.

ANSWERS

- | | | | | |
|---------|---------|---------|---------|---------|
| 1. (d) | 2. (a) | 3. (b) | 4. (b) | 5. (c) |
| 6. (d) | 7. (b) | 8. (b) | 9. (d) | 10. (c) |
| 11. (a) | 12. (d) | 13. (b) | 14. (a) | 15. (d) |
| 16. (a) | 17. (d) | 18. (d) | 19. (a) | 20. (c) |
| 21. (d) | 22. (c) | 23. (d) | 24. (a) | 25. (c) |



National Cyber Olympiad Practice Sheet

- Which of these peripheral devices is an input device?
(i) Scanner (ii) Joystick
(iii) Barcode reader (iv) All of these
- Which of these works on the input given to a computer?
(i) Keyboard (ii) CPU
(iii) Printer (iv) Monitor
- Which of these does an MB refer to?
(i) 8 bits (ii) 1024 bytes
(iii) 1024 kilobytes (iv) 1024 gigabytes
- Which of these contains daughterboards?
(i) Motherboard
(ii) Printed circuitboard
(iii) Silicon tube
(iv) RAM
- What stores programs and instructions needed to run a computer?
(i) RAM (ii) ROM
(iii) PROM (iv) EEROM
- Which of these is displayed on the taskbar whenever we minimize a window in Windows?
(i) Object icon (ii) Document icon
(iii) Disk drive icon (iv) Shortcut icon
- Which of these Windows tool sare used to add a clock to the notification area onthe taskbar?
(i) Screen resolution (ii) Display
(iii) Gadgets (iv) Folder
- While formatting a document in Word, which of these separates one paragraph from another?
(i) Alignment (ii) Spacing and style
(iii) Paragraph mark (iv) Display mark
- Which of these refers to the alignment of a paragraph in MS Word?
(i) Hanging indent and margins
(ii) Cut, copy, and paste
(iii) Left, right, centre, or justified
(iv) Bold, italics, or underline
- For setting text in columns, we select the columns option from which of these groups?
(i) Themes
(ii) Paragraph
(iii) Page Layout
(iv) Page Background
- Which of these is a text styling feature in MS Word?
(i) Bookmarks (ii) Word Art
(iii) Clip Art (iv) Themes
- Which of these help to make changes to a picture after it is inserted in MS Word?
(i) Drawing tools
(ii) Shape effects tools
(iii) Picture tools
(iv) Wrap text tool
- Which of these tools in Word helps to remove or hide areas of a picture by cutting off its vertical or horizontal edges?
(i) Cropping (ii) Cutting
(iii) Copying (iv) Pasting
- Which of these programs creates files containing slides?
(i) MS Word (ii) PowerPoint
(iii) WordPad (iv) Internet Explorer
- Which of these can you add to your presentations in PowerPoint?
(i) Charts and graphs
(ii) Tables and transitions
(iii) Clip Arts and backgrounds
(iv) All of these
- Which of these views is used to review and change a presentation?
(i) Slide sorter (ii) Notes page
(iii) Slide Show (iv) Reading
- Which of these tools in PowerPoint helps us to create a custom layout?
(i) Themes (ii) Clip Arts
(iii) Word Art (iv) Slide Master
- Which of these tools controls how your presentation moves from one slide to another in PowerPoint?
(i) Audio tools (ii) Slide transitions
(iii) Rehearsal feature (iv) None of these
- Which of these is used at the beginning and end of a flow chart?
(i) Terminator box
(ii) Input or Output box
(iii) Decision box
(iv) Process box
- I want to print a list of names starting with A, B, and C. Which of these should I use in a flow chart?
(i) Loop (ii) Count
(iii) Process (iv) Connector

Answers
1. (iv); 2. (iii); 3. (iii); 4. (i); 5. (iii); 6. (iii); 7. (iii); 8. (iii); 9. (iii); 10. (iii); 11. (iii); 12. (iii); 13. (i); 14. (ii); 15. (iv); 16. (iv); 17. (iv); 18. (i); 19. (i); 20. (i)



National Cyber Olympiad

Today Computer and Information Technology have become integral part of human existence. Computer awareness along with mental ability, logical and analytical reasoning is required to be successful in today's competitive world. National Cyber Olympiad is now a global search competition that aims at identifying and nurturing cyber talent amongst the youngsters. It is as much about inspiring the younger generation to enhance their knowledge and comprehension of issues related to computers and Information Technology as about testing their aptitude in these streams.

The National Cyber Olympiad is in two levels:

Level 1:

The first level of the test is organized in the respective schools of the participants during the school hours. The level 1 competition is a written objective-type test of 60 minutes duration comprising 35 objective-type (Multiple Choice) questions for classes 3 to 4 and 50 objective-type (Multiple Choice) questions for classes 5 to 12. The question paper consists of Mental Ability, Logical and Analytical Reasoning, Computer and Information Technology. There are separate question papers for each class. The medium of the test is English. CBSE, ICSE/ISC and State Board syllabus is followed for setting the test papers.

Level 2:

The qualifiers to second round would include top 5% students who appear for the 1st level exam from each class, state wise top 10 performing students from each class and topper of each class where at least 10 students have appeared for the exam.

No of questions: 50

Time allowed: 60 minutes

There are 3 sections: 15 questions in section I, 15 in section II and 20 in section III.

Syllabus

Section - I (Mental Ability): Regional and Roman Numerals, Numbers up to one Lakh, Multiples and Factors, Fractional Numbers, Addition, Subtraction, Multiplication, Division, Estimation, Geometrical Shapes, Measurement, Time, Money, Perimeter, Pictorial Representation of Data, Prime and Composite Numbers, HCF and LCM.

Section - II (Logical and Analytical Reasoning): Problems Based on Figures, Find Odd Numeral Out, Series Completion, Coding-Decoding, Mathematical Reasoning, Analytical Reasoning, Mirror Images, Embedded Figures.

Section - III (Computers and Information Technology): Input and Output Devices, Hardware, Software, Storage Devices, Memory - Primary & Secondary Memory, MS Paint, MS Word, Introduction to MS PowerPoint, Introduction to Multimedia, Internet, Computer Networks, MS Windows.

Mental Ability

1. 4 km 79 m equals

a. 4.079 km

b. 40.79 km

c. 0.4079 km

d. 407.9 km


2. 5 min. + 25 sec =

a. 6 min. 95 sec.

b. 3 min. 50 sec.

c. 3 min. 65 sec.

d. 4 min. 85 sec.

3. A race started at 11:16 A.M. The first person to cross the finish line came in at 1:22 P.M. How long did the first person to reach the finish line?
- a. 13 hours, 38 minutes b. 2 hours, 6 minutes c. 1 hours, 6 minutes d. 2 hours, 38 minutes
4. If $A = 5$, for which number, sentence is true?
- a. $A \times 4 = 20$ b. $A - 3 = 8$ c. $12 + A = 7$ d. $15 \div A = 10$
5. Which of the following are supplementary angles?
- a. $180^\circ, 180^\circ$ b. $100^\circ, 80^\circ$ c. $50^\circ, 50^\circ$ d. $40^\circ, 50^\circ$
6. How many '6's are there in the following sequence which are followed by 3 and preceded by 8?
- 9486327186898136897863136843235
- a. 2 b. 3 c. 4 d. 5
7. Find the number of triangles in the given figure. 
- a. 8 b. 10 c. 12 d. 14
8. Complete the series 7, 14, 28, 56, _____
- a. 112 b. 102 c. 104 d. 124
9. Tokyo : Japan :: _____ : Pakistan
- a. Lahore b. Islamabad c. Kabul d. Dubai
10. Tennis : Court :: Cricket : _____
- a. Ring b. Rink c. Pitch d. Road
11. Steel : Bokaro :: Hosiery : _____
- a. Ambala b. Ludhiana c. Jalandhar d. Rohtak
12. In the class of 40 students, if Sanju is at 30th place from one end, what is his position from the other end?
- a. 9th b. 12th c. 10th d. 11th
13. Nikhilesh is taller than Arvind who is taller than Mahendra. Naresh is smaller than Suresh but taller than Nikhilesh. Who is the smallest?
- a. Nikhilesh b. Arvind c. Mahendra d. Data inadequate
14. If DOWN is coded as FQYP then how will WITH be coded?
- a. KYN b. JYK c. YKVJ d. JKVY
15. All labourers are wrestlers. All grocers are labourers. We can conclude that I. All grocers are wrestlers. II. Some wrestlers are grocers. III. Some wrestlers are labourers. IV. Some labourers are grocers.
- a. All b. Only I and IV c. Only IV d. Only II and III

Logical and Analytical Reasoning

16. $5 \frac{3}{4} = 5 + (\square + \square + \square)$. Here, \square stands for
- a. $\frac{3}{4}$ b. $\frac{1}{4}$ c. 3 d. 4
17. Find odd one out.
- a. Mars b. Jupiter c. Comet d. Earth
18. Library is to book as book is to
- a. Page b. Copy c. Binding d. Cover
19. If the day before yesterday is two days after Monday then what day is it today?
- a. Monday b. Tuesday c. Wednesday d. Saturday
20. Find the odd one out
- a. Picture b. Photograph c. Poster d. Scenery

21. If owl is coded as qyn, then what is a code of oat?
 a. pci b. qcw c. Qqbw d. qcv
22. As moon is related to Satellite, the Earth is related to _____
 a. Sun b. Plants c. Solar system d. Star
23. Find $12 + 3 \times 3 - 5 \div 4 = ?$
 a. 13 b. 31 c. 28 d. 32
24. When arranged in order from smallest to biggest, which number will be at last position in the sequence?
 21, 12, 79, 63, 36, 47
 a. 79 b. 36 c. 47 d. 12
25. $6 + 0 \times 6 \times 2 + 1$ equals.
 a. 18 b. 7 c. 3 d. 0
26. Find the odd one out. A, E, I, O, U
 a. A b. E c. I d. None of the above
27. Find the next letters of the following series. O, T, T, F, F, S, _____
 a. SN b. SE c. ST d. SO
28. Find odd one out
 1, 2, 3, 5
 a. Only 1 b. Only 2 c. 1 & 2 d. None of the above
29. Find the next letter of the following series M, T, W, T, F, _____
 a. A b. B c. S d. H
30. Find the odd one out
 a. Cut b. Put c. Nut d. But
- Computers and Information Technology**
31. Windows 2007 is a
 a. Software b. Hardware c. Operating system d. Input device
32. Find the odd term out.
 a. Scanner b. MS Word c. Monitor d. Printer
33. Computer cannot perform anything on its own. It can process only when it is instructed to do so. These sets of instructions that are fed in by the user are termed as
 a. Hardware b. Software c. Flowcharts d. Program
34. MS Paint is
 a. Accounting software b. System software c. Application software d. Physical component
35. The small picture representing a program is a
 a. Icon b. File c. Folder d. Drive
36. While working in MS Paint, the option which is used to show the drawing in a small reference window is
 a. Show grid b. Zoom in c. View bitmap d. Show thumbnail
37. Which of the commands is used to hide the turtle in LOGO?
 a. ST b. CS c. HT d. BYE
38. Find the storage device out.
 a. Monitor b. Keyboard c. CPU d. Hard disk
39. Which button restores multiple Undo actions?
 a. Undo b. Redo c. Repeat d. Clear

40. ROM is a
 a. Non Volatile Memory b. Read only memory c. Read write Memory d. Volatile Memory
41. The turtle appears in LOGO at the _____ of the screen
 a. Middle b. Center c. Top d. Bottom
42. The full form of Email is:
 a. Electronic mail b. Emerging mail c. Energy Mail d. Effective Mail
43. Identify the input device which acts like a photocopy machine:
 a. Keyboard b. Modem c. Speaker d. Scanner
44. The background of Desktop is called _____.
 a. Screen Saver b. Wallpaper c. Background d. None of these
45. In which generation, VLSI technology was used in computer.
 a. First Generation b. Second Generation c. Third Generation d. Fourth Generation
46. Computer has every inside except?
 a. Library b. Calculator c. Dictionary d. Wardrobe
47. The term _____ include audio, video, audio-video mixing, designing, colouring painting etc.
 a. DTP b. Coral Draw c. Multimedia d. Internet
48. Which of the following is the first page of website?
 a. Home page b. Web page c. First page d. None of these
49. Which of the following is an example of analog computer?
 a. Laptop b. Desktop c. Palmtop d. None of these
50. VDU stands for
 a. Visual Display Unit b. Virtual Display Unit c. View Display Unit d. None of these

ANSWER SHEET

Darken your choice with a HB pencil

1. <input type="checkbox"/> a <input type="checkbox"/> b <input type="checkbox"/> c <input type="checkbox"/> d 2. <input type="checkbox"/> a <input type="checkbox"/> b <input type="checkbox"/> c <input type="checkbox"/> d 3. <input type="checkbox"/> a <input type="checkbox"/> b <input type="checkbox"/> c <input type="checkbox"/> d 4. <input type="checkbox"/> a <input type="checkbox"/> b <input type="checkbox"/> c <input type="checkbox"/> d 5. <input type="checkbox"/> a <input type="checkbox"/> b <input type="checkbox"/> c <input type="checkbox"/> d 6. <input type="checkbox"/> a <input type="checkbox"/> b <input type="checkbox"/> c <input type="checkbox"/> d 7. <input type="checkbox"/> a <input type="checkbox"/> b <input type="checkbox"/> c <input type="checkbox"/> d 8. <input type="checkbox"/> a <input type="checkbox"/> b <input type="checkbox"/> c <input type="checkbox"/> d 9. <input type="checkbox"/> a <input type="checkbox"/> b <input type="checkbox"/> c <input type="checkbox"/> d 10. <input type="checkbox"/> a <input type="checkbox"/> b <input type="checkbox"/> c <input type="checkbox"/> d 11. <input type="checkbox"/> a <input type="checkbox"/> b <input type="checkbox"/> c <input type="checkbox"/> d 12. <input type="checkbox"/> a <input type="checkbox"/> b <input type="checkbox"/> c <input type="checkbox"/> d 13. <input type="checkbox"/> a <input type="checkbox"/> b <input type="checkbox"/> c <input type="checkbox"/> d	14. <input type="checkbox"/> a <input type="checkbox"/> b <input type="checkbox"/> c <input type="checkbox"/> d 15. <input type="checkbox"/> a <input type="checkbox"/> b <input type="checkbox"/> c <input type="checkbox"/> d 16. <input type="checkbox"/> a <input type="checkbox"/> b <input type="checkbox"/> c <input type="checkbox"/> d 17. <input type="checkbox"/> a <input type="checkbox"/> b <input type="checkbox"/> c <input type="checkbox"/> d 18. <input type="checkbox"/> a <input type="checkbox"/> b <input type="checkbox"/> c <input type="checkbox"/> d 19. <input type="checkbox"/> a <input type="checkbox"/> b <input type="checkbox"/> c <input type="checkbox"/> d 20. <input type="checkbox"/> a <input type="checkbox"/> b <input type="checkbox"/> c <input type="checkbox"/> d 21. <input type="checkbox"/> a <input type="checkbox"/> b <input type="checkbox"/> c <input type="checkbox"/> d 22. <input type="checkbox"/> a <input type="checkbox"/> b <input type="checkbox"/> c <input type="checkbox"/> d 23. <input type="checkbox"/> a <input type="checkbox"/> b <input type="checkbox"/> c <input type="checkbox"/> d 24. <input type="checkbox"/> a <input type="checkbox"/> b <input type="checkbox"/> c <input type="checkbox"/> d 25. <input type="checkbox"/> a <input type="checkbox"/> b <input type="checkbox"/> c <input type="checkbox"/> d 26. <input type="checkbox"/> a <input type="checkbox"/> b <input type="checkbox"/> c <input type="checkbox"/> d	27. <input type="checkbox"/> a <input type="checkbox"/> b <input type="checkbox"/> c <input type="checkbox"/> d 28. <input type="checkbox"/> a <input type="checkbox"/> b <input type="checkbox"/> c <input type="checkbox"/> d 29. <input type="checkbox"/> a <input type="checkbox"/> b <input type="checkbox"/> c <input type="checkbox"/> d 30. <input type="checkbox"/> a <input type="checkbox"/> b <input type="checkbox"/> c <input type="checkbox"/> d 31. <input type="checkbox"/> a <input type="checkbox"/> b <input type="checkbox"/> c <input type="checkbox"/> d 32. <input type="checkbox"/> a <input type="checkbox"/> b <input type="checkbox"/> c <input type="checkbox"/> d 33. <input type="checkbox"/> a <input type="checkbox"/> b <input type="checkbox"/> c <input type="checkbox"/> d 34. <input type="checkbox"/> a <input type="checkbox"/> b <input type="checkbox"/> c <input type="checkbox"/> d 35. <input type="checkbox"/> a <input type="checkbox"/> b <input type="checkbox"/> c <input type="checkbox"/> d 36. <input type="checkbox"/> a <input type="checkbox"/> b <input type="checkbox"/> c <input type="checkbox"/> d 37. <input type="checkbox"/> a <input type="checkbox"/> b <input type="checkbox"/> c <input type="checkbox"/> d 38. <input type="checkbox"/> a <input type="checkbox"/> b <input type="checkbox"/> c <input type="checkbox"/> d	39. <input type="checkbox"/> a <input type="checkbox"/> b <input type="checkbox"/> c <input type="checkbox"/> d 40. <input type="checkbox"/> a <input type="checkbox"/> b <input type="checkbox"/> c <input type="checkbox"/> d 41. <input type="checkbox"/> a <input type="checkbox"/> b <input type="checkbox"/> c <input type="checkbox"/> d 42. <input type="checkbox"/> a <input type="checkbox"/> b <input type="checkbox"/> c <input type="checkbox"/> d 43. <input type="checkbox"/> a <input type="checkbox"/> b <input type="checkbox"/> c <input type="checkbox"/> d 44. <input type="checkbox"/> a <input type="checkbox"/> b <input type="checkbox"/> c <input type="checkbox"/> d 45. <input type="checkbox"/> a <input type="checkbox"/> b <input type="checkbox"/> c <input type="checkbox"/> d 46. <input type="checkbox"/> a <input type="checkbox"/> b <input type="checkbox"/> c <input type="checkbox"/> d 47. <input type="checkbox"/> a <input type="checkbox"/> b <input type="checkbox"/> c <input type="checkbox"/> d 48. <input type="checkbox"/> a <input type="checkbox"/> b <input type="checkbox"/> c <input type="checkbox"/> d 49. <input type="checkbox"/> a <input type="checkbox"/> b <input type="checkbox"/> c <input type="checkbox"/> d 50. <input type="checkbox"/> a <input type="checkbox"/> b <input type="checkbox"/> c <input type="checkbox"/> d
--	---	--	--